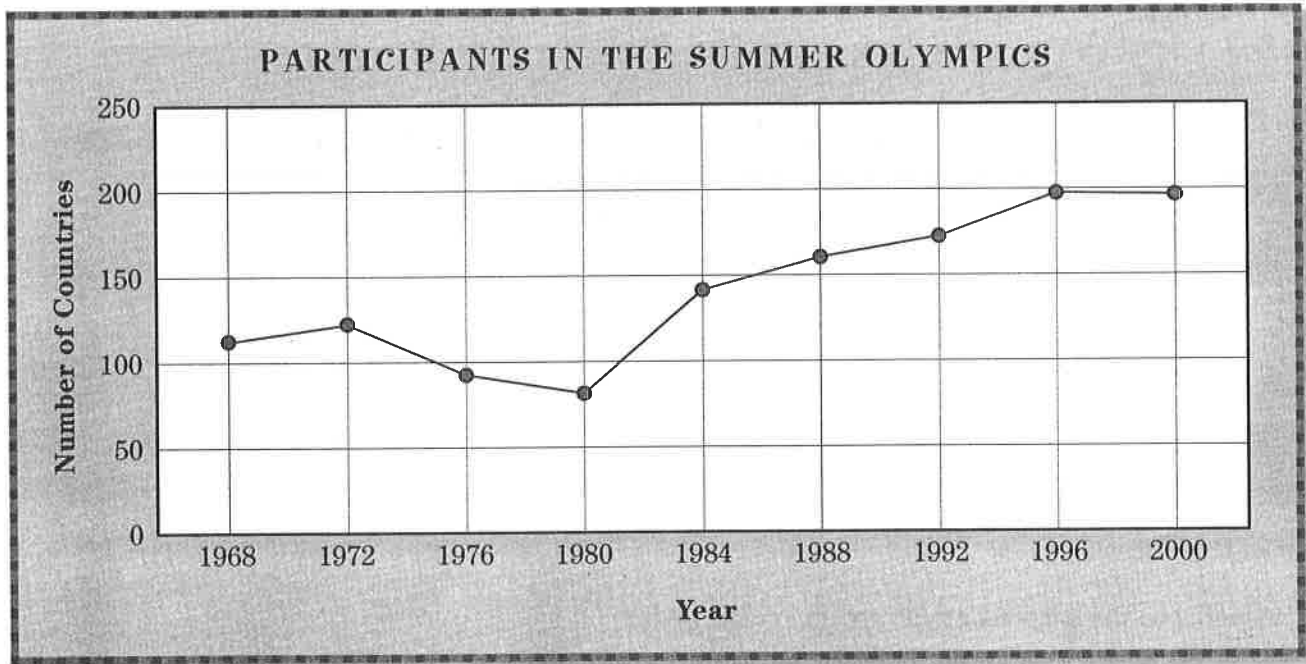


Name _____ Date _____

Olympic History

The line graph below shows the number of countries that participated in the Summer Olympic Games from 1968 through 2000. Use the graph to answer the questions.



- 1 About how many countries participated in the 1972 Summer Olympics?

- 2 About how many countries participated in the 1996 Summer Olympics?

- 3 About how many more countries participated in 1984 than in 1980?

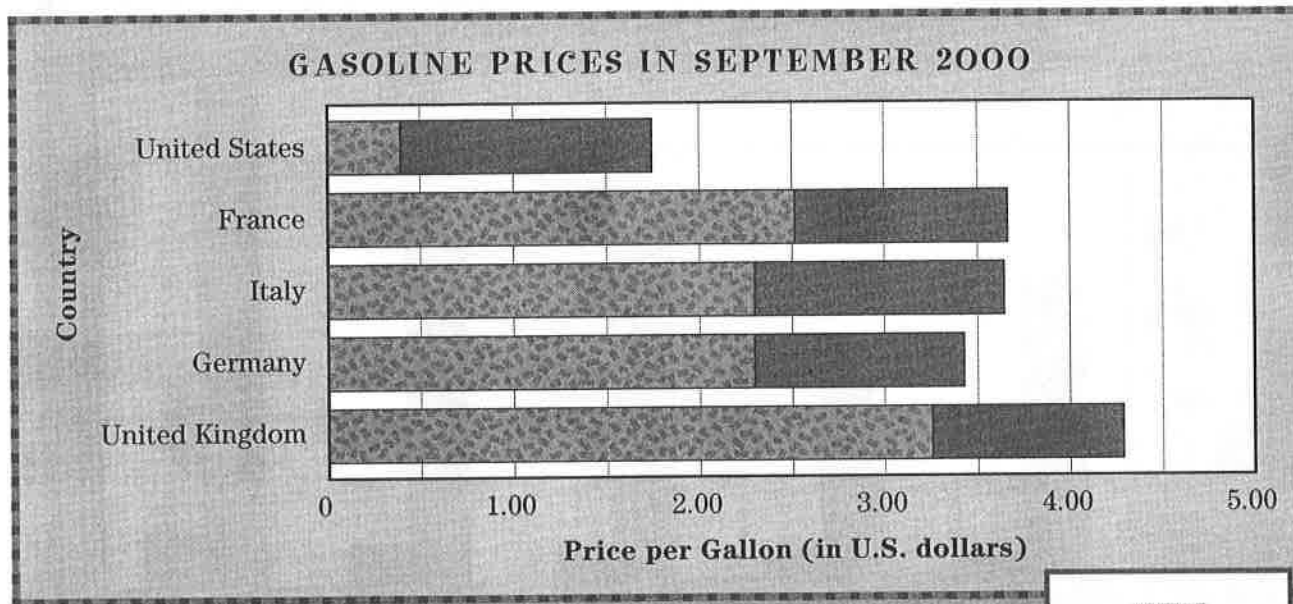
- 4 In which year did the fewest countries participate?

- 5 Describe the trend in the number of countries participating in the Summer Olympics since 1984.

Name _____ Date _____

Gas Guzzling

The bar graph below shows the average price (in U.S. dollars) for a gallon of gasoline in the United States and four European countries in September 2000—and how much of that price went toward taxes. Use the graph to choose the best answer to each question.



KEY



tax



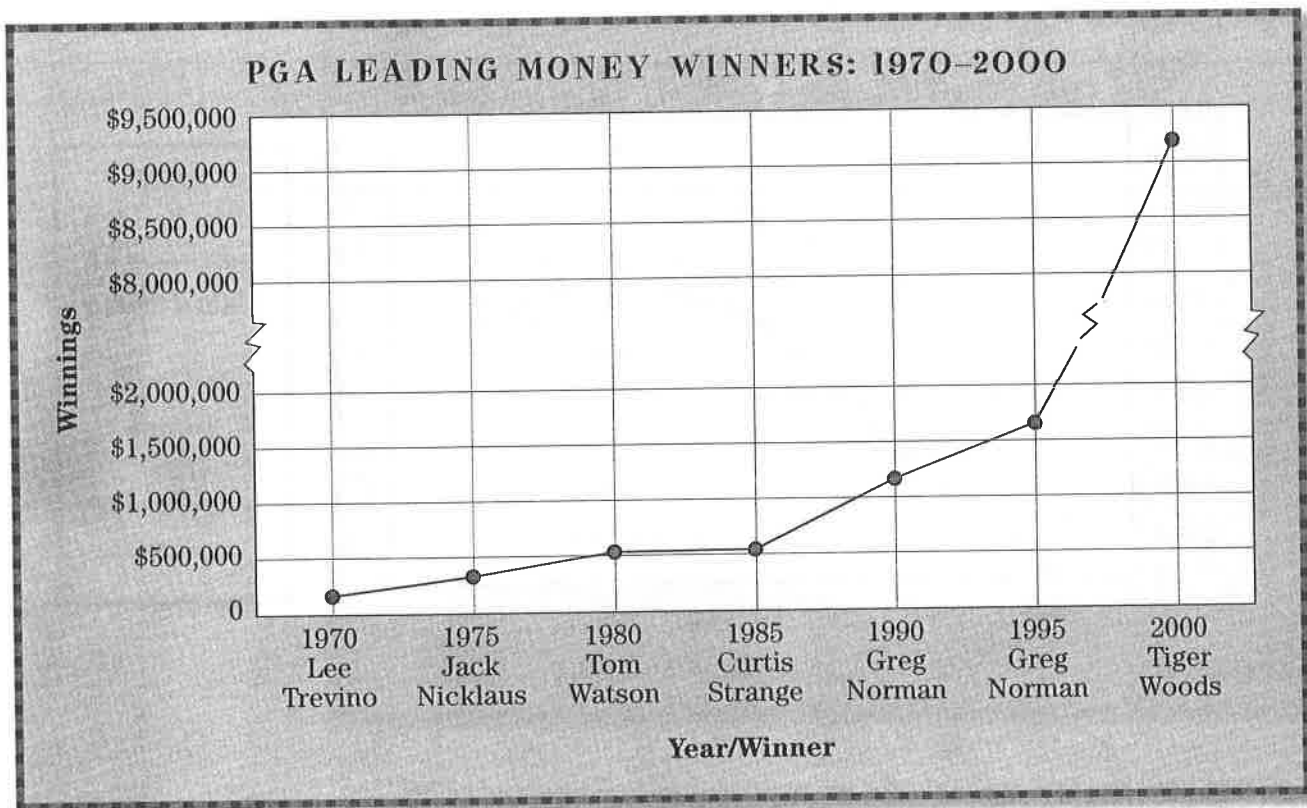
price per gallon

- 1 In September 2000, which country had the highest price per gallon?
 (a) United States (c) United Kingdom
 (b) France (d) Italy
- 2 In France, about how much of the price per gallon went to taxes?
 (a) $\frac{1}{4}$ (c) $\frac{3}{4}$
 (b) $\frac{1}{2}$ (d) $\frac{2}{3}$
- 3 In the United Kingdom, what percentage of the price per gallon went to taxes?
 (a) about 90% (c) about 60%
 (b) about 75% (d) about 50%
- 4 In Italy, the total price per gallon of gasoline was about _____.
 (a) \$3.65 (c) \$2.30
 (b) \$3.25 (d) \$1.75
- 5 Which conclusion about gasoline prices in the United States is most likely valid?
 (a) U.S. prices are higher than prices in Europe.
 (b) Americans pay less than half the price per gallon that most Europeans pay.
 (c) U.S. prices include a higher percentage of taxes than European prices do.
 (d) Americans pay higher taxes per gallon than people in any other country.

Name _____ Date _____

Great Golfers

The line graph below shows the winnings earned by the Professional Golfers' Association's leading money winners between 1970 and 2000. Use the graph to answer the questions.



- 1 About how much money did Lee Trevino earn in 1970?

- 2 Who was the leading money winner in 1980?

- 3 In what years was Greg Norman the leading money winner?

- 4 About how much money did Tiger Woods earn in 2000?

- 5 How has the amount of money won each year changed since 1970?
